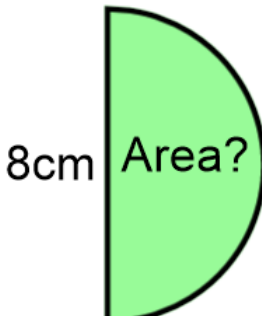
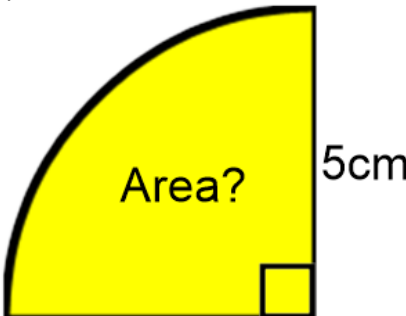
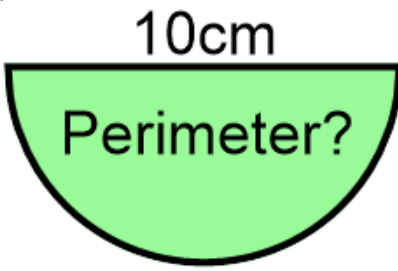


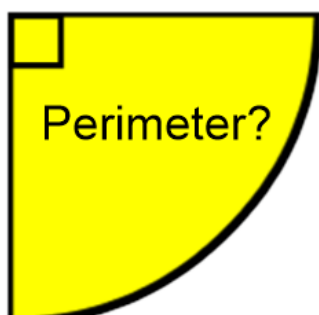
Arc Length and Area of Sectors

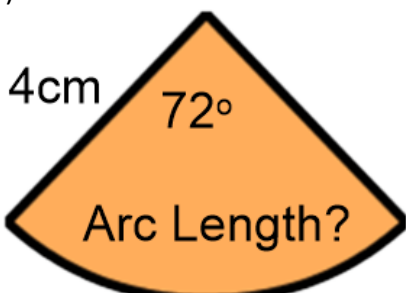
Increasingly
Difficult
Exercises

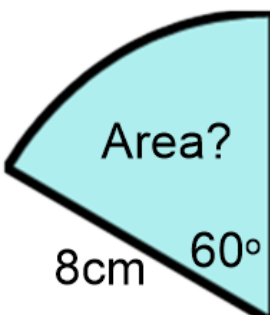
a)  8cm Area?

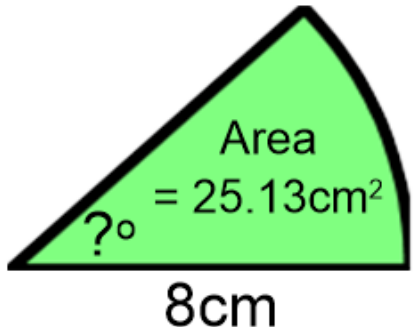
b)  Area? 5cm

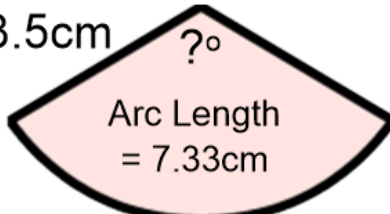
c)  10cm Perimeter?

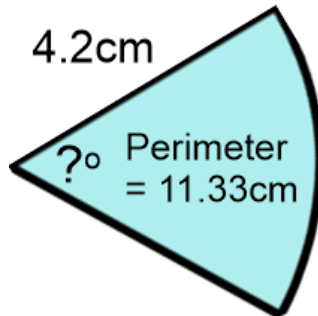
d)  3cm Perimeter?

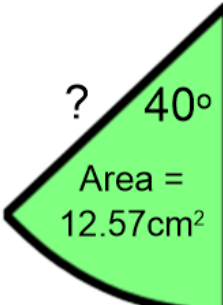
e)  4cm 72° Arc Length?

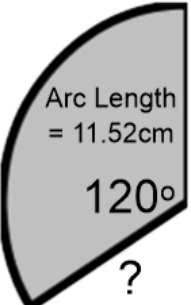
f)  Area? 8cm 60°

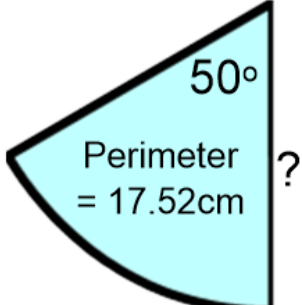
g)  Area = 25.13cm² 8cm ?°

h)  3.5cm ?° Arc Length = 7.33cm

i)  4.2cm ?° Perimeter = 11.33cm

j)  ? 40° Area = 12.57cm²

k)  Arc Length = 11.52cm 120° ?

l)  50° Perimeter = 17.52cm ?