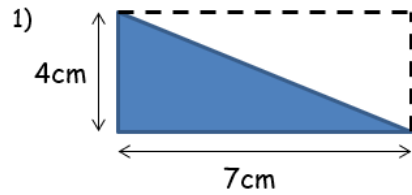
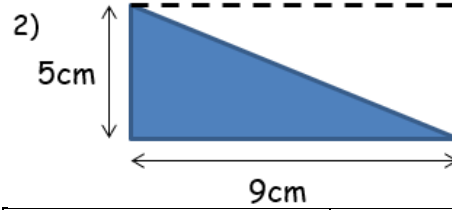


Find the area of the triangle



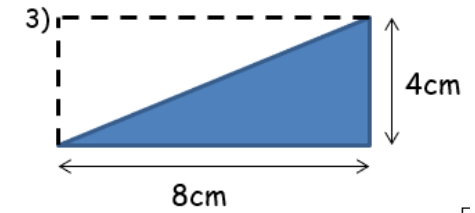
Area of a triangle	$(\text{Base} \times \text{height}) \div 2$
base	7cm
Height	4 cm
Do base x height	$7 \times 4 = 28$
Divide by 2	$28 \div 2$
Answer	14 cm^2

b) Find the area of the triangle



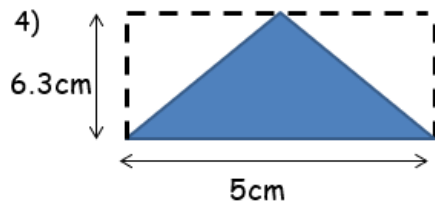
Area of a triangle	$(\text{Base} \times \text{height}) \div 2$
base	9cm
Height	5 cm
Do base x height	$9 \times 5 = 45$
Divide by 2	
Answer	

c)



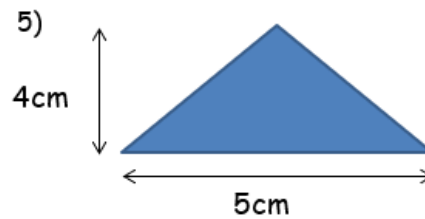
Area of a triangle	$(\text{Base} \times \text{height}) \div 2$
base	8cm
Height	4 cm
Do base x height	
Divide by 2	
Answer	

d)



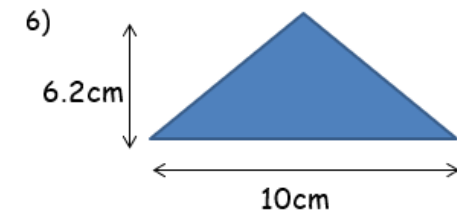
Area of a triangle	$(\text{Base} \times \text{height}) \div 2$
base	
Height	
Do base x height	
Divide by 2	
Answer	

e)



Area of a triangle	$(\text{Base} \times \text{height}) \div 2$
base	
Height	
Do base x height	
Divide by 2	
Answer	

f)



Area of a triangle	$(\text{Base} \times \text{height}) \div 2$
base	
Height	
Do base x height	
Divide by 2	
Answer	