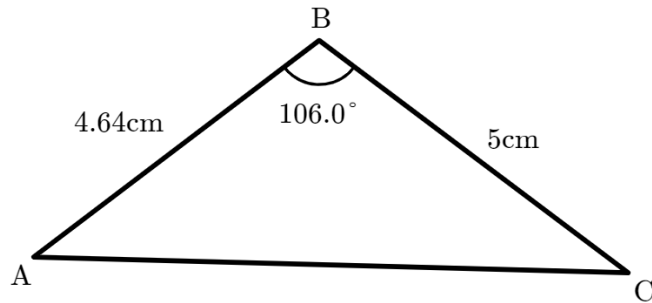
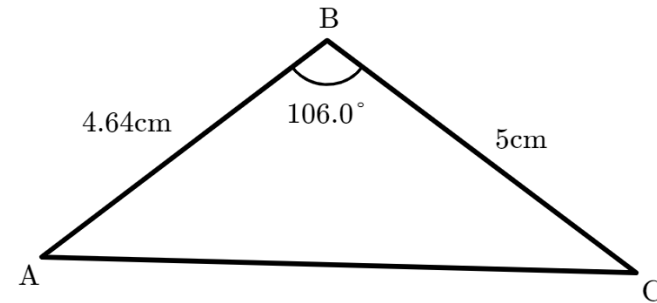


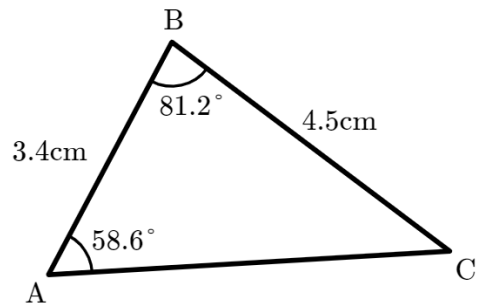
- a)
Calculate the length of the side AC.
Give your answer to 3 significant figures.



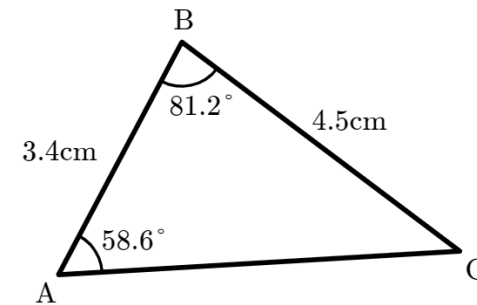
- a)
Calculate the length of the side AC.
Give your answer to 3 significant figures.



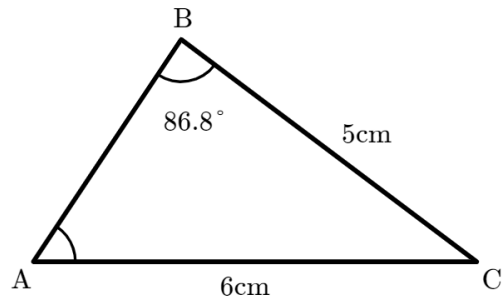
- b)
Calculate the length of the side AC.
Give your answer to 3 significant figures.



- b)
Calculate the length of the side AC.
Give your answer to 3 significant figures.



- c)
Calculate the length of the side AB.
Give your answer to 3 significant figures.



- c)
Calculate the length of the side AB.
Give your answer to 3 significant figures.

